
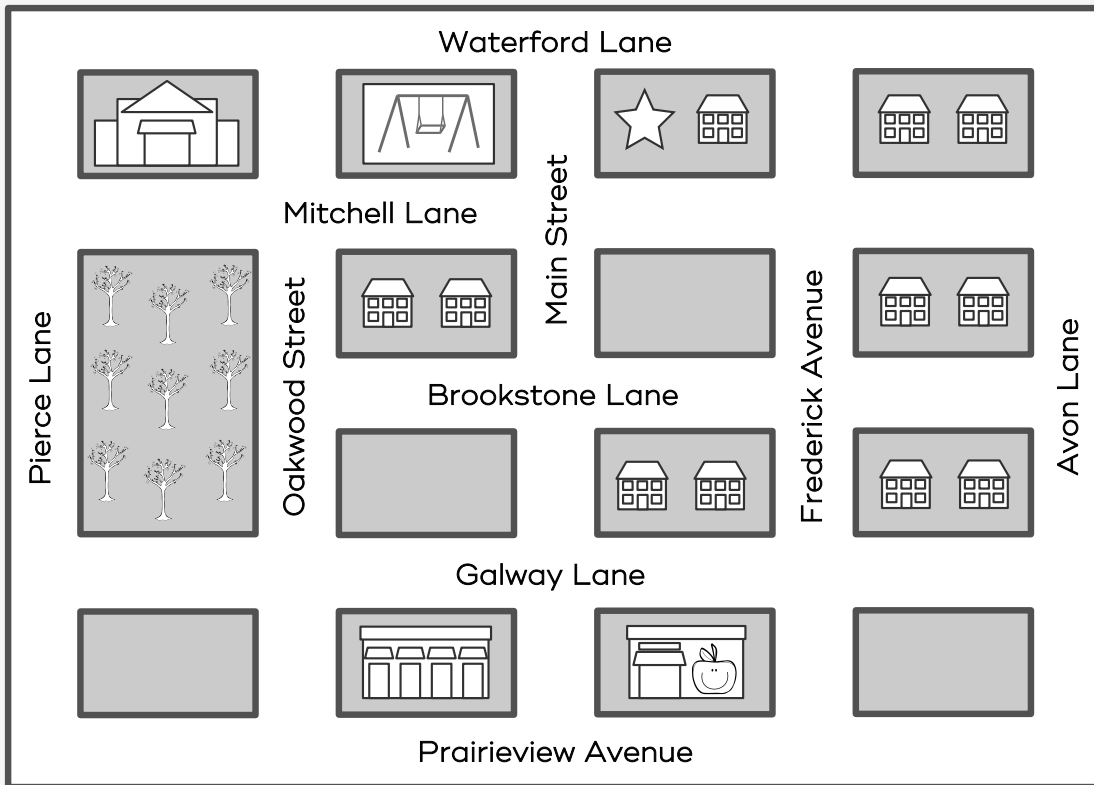



Using Cardinal Directions

Use the map to help Nico find his way around his neighborhood. Nico's house is marked with a ☆.

Cardinal Directions



FIND IT!

★ From his home, which direction will Nico travel to go to the playground?

★ To get to the grocery store, Nico will

travel _____ on

(direction)

_____.

(road)

★ The grocery store is _____ of the mall.

(direction)

DRAW IT!

★ Draw a ☺ one block SOUTH of Nico's house.

★ Nico's aunt lives one block NORTH of the mall. Draw her house there.

★ Draw an X on the empty block that is farthest EAST.

★ Circle the block WEST of the mall.